



# THE PRIME EXAMINATIONS 2022

## P.7 PRE - PLE TRIAL SET IV

SOCIAL STUDIES AND RELIGIOUS EDUCATION (Abridged Curriculum)

Time allowed 2 hours 15 minutes

INDEX NO:

Random No.

Personal No.



Top up your  
classwork with  
Prime Learn

www.prime-learn.com

Candidate's Name: .....

Candidate's Signature: .....

School Random No. ....

District ID: .....

### READ THE FOLLOWING INSTRUCTIONS CAREFULLY

1. Do not write your school or district name anywhere on this paper.
2. This paper has **two** sections: A and B Section A has **40** questions and section B has **15** questions.
3. Answer **all** questions. All answers to both sections A and B must be written in the spaces provided.
4. All answers **must** be written using a **blue** or **black** ball point pen or ink. Any work written in pencil other than graphs and diagrams will not be marked.
5. Unnecessary **changes** in your work and handwriting that cannot easily be read may lead to **loss of marks**.
6. Do not fill anything in the table indicated "For Examiners' use only", and those boxes inside the question paper.

### FOR EXAMINERS' USE ONLY

QUESTION NUMBER	MARKS ATTAINED	INITIALS
1 - 10		
11 - 20		
21 - 30		
31 - 40		
41 - 43		
44 - 46		
47 - 49		
50 - 52		
52 - 55		
53 - 55		

APPROVED:

Consultant

Social Studies Department (I EC)

PUBLISHERS OF:-

THE PRIME SCHEMING FRAMEWORKS, PUPILS' WORKBOOKS, LESSON COURSE BOOKS,  
HOLIDAY PACKAGES, LEARNING GAMES AND MORE

Turn Over

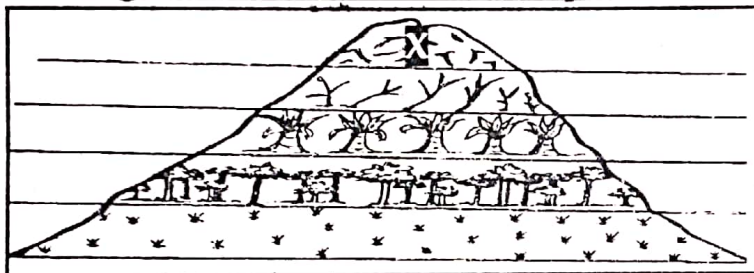
Organised by: PRIME EDUCATIONAL CONSULT @2022

Kampala

**Section A. (40 Marks)**

1. How was a **dog** helpful to early man in getting food?
2. Why is the government encouraging the growing of **non-traditional cash crops**?
3. Mention any **one** example of a modern method of mining in East Africa.
4. Why is a **radio** referred to as mass media communication?
5. Which governor of Uganda greatly encouraged cash crop growing?
6. What is the role of the **National Forestry Authority** in the country?
7. Give any **one** way a recycling factory can promote sanitation in an area.

Use the diagram below to answer the questions 8 and 9.



8. How does altitude affect vegetation according to the above diagram?
9. Why is there no vegetation in the area marked X?
10. Mention any **one** Island country located in the **Atlantic Ocean**.
11. How was **TANU** similar to **KANU** in terms of their activities?
12. Why are fresh fruits transported by air transport to overseas countries?
13. How was the formation of **Atlas Mountains** different from that of **Drakensberg mountains**?
14. Which cash crop is mainly grown on Tilda Irrigation Scheme?



15. Why do many tourists visit **Lake Nakuru**?
16. How does **River Nile** end its flow?
17. Give any one economic value of coral reefs to the people of East Africa.
18. State any one method of controlling tsetse flies in East Africa.
19. Why is **Nelson Mandela** regarded as a hero in South Africa?
20. Draw a road sign showing school ahead in the space below.
- 
- 
21. Which UN agency is in charge of fighting against pandemics like **COVID 19**?
22. How is a **windsock** important at an airstrip?
23. State any one negative effect of deforestation on climate.
24. Why is **Akasombo dam** referred to as a multi-purpose river project?
25. Give any one way Kenya benefits from Uganda.
26. Which ministry is in charge of **maintaining main roads** in Uganda?
27. Why is the government encouraging people to set up small scale industries in rural areas?
28. What role was played by the **Pan-Africanists** in the struggle for Africa's independence?
29. How did the coming of **Lord Delamere** affect the natives of Kenya?
30. Which organization was replaced by the African Union?

31. Why were the African chiefs interested in slave trade?  
\_\_\_\_\_
32. Give any one problem faced by people living in rift valleys.  
\_\_\_\_\_
33. How did the 1900 Buganda Agreement benefit the colonial government?  
\_\_\_\_\_
34. State any one cause of landslides in Bududa district.  
\_\_\_\_\_
35. Give any one reason why Lake Katwe is not considered as a rift valley lake.  
\_\_\_\_\_

**For questions 36 to 40, answer Either Christianity Or Islamic but not both in a number.**

36. **Either:** How did Jesus show love to the family of Lazarus?  
\_\_\_\_\_
- Or:** How did Musa help the Ban-Israel?  
\_\_\_\_\_
37. **Either:** Why do Christians worship God?  
\_\_\_\_\_
- Or:** Why do Muslims worship Allah?  
\_\_\_\_\_
38. **Either:** Give any one way Christians show concern to their neighbours.  
\_\_\_\_\_
- Or:** Give any one way Muslims show concern to their neighbours.  
\_\_\_\_\_
39. **Either:** Why do many Christians fear the Day of Judgement?  
\_\_\_\_\_
- Or:** Why do many Muslims fear the Day of Judgement?  
\_\_\_\_\_
40. **Either:** Mention any one event that happened on Palm Sunday.  
\_\_\_\_\_
- Or:** Mention any one way the people of Uganda helped in the spread of Islam.  
\_\_\_\_\_

☐

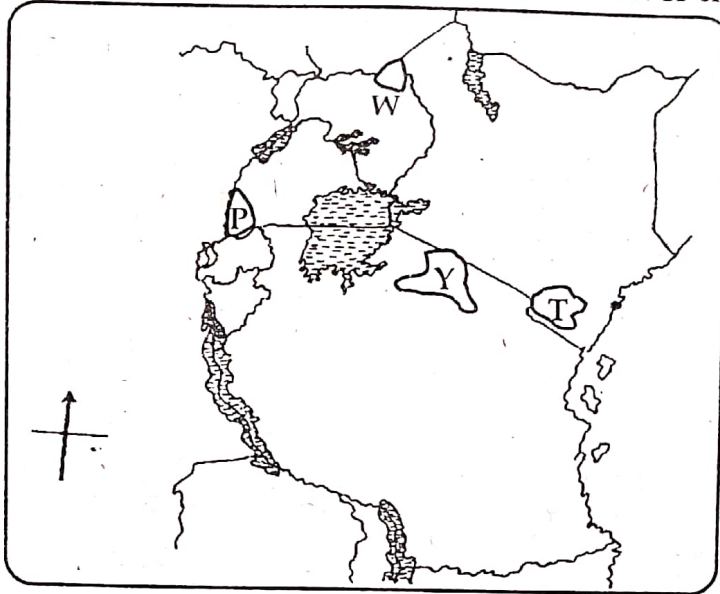
**Section B (60 Marks)**

41. (a) What is barter trade?  
\_\_\_\_\_
- (b) Why did the early local communities in East Africa use barter trade?  
\_\_\_\_\_
- (c) Name the system of trade that replaced barter trade.  
\_\_\_\_\_



(d) State any one disadvantage of barter trade.

42. Use the map of East Africa below to answer the questions below.



(a) Name the national game park marked Y.

(b) Why do many tourists visit the national game park marked T?

(c) Compare the natural vegetation in game park W with that of game park marked P.

(d) Use letter N to locate Great Ruaha national game park.

43. (a) In which region of Africa does ECOWAS operate?

(b) Name the military wing of ECOWAS.

(c) State any two objectives of ECOWAS.

(i) \_\_\_\_\_

(ii) \_\_\_\_\_

44. (a) Mention any two special groups of people represented in our parliament.

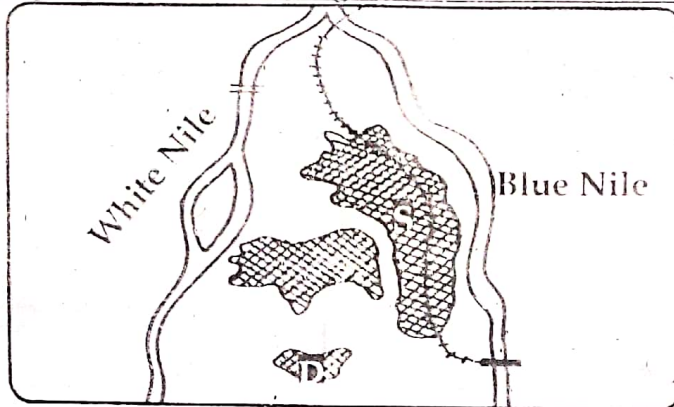
(i) \_\_\_\_\_ (ii) \_\_\_\_\_

(b) How is the legislature similar to the defunct LEGCO?

(c) State any reason why Buganda kingdom refused to send representatives to LEGCO.

45. (a) Why did the Germans use direct rule in Tanganyika?  
 (b) How did the missionaries pave away for colonial rule in East Africa?  
 (c) State two reasons why the British used indirect rule in Uganda.  
 (i) \_\_\_\_\_  
 (ii) \_\_\_\_\_

46. Use the diagram of Gezira irrigation scheme to answer the questions that follow.



- (a) Which cash crop is mainly grown on the irrigation scheme marked S?  
 (b) Name the irrigation scheme marked D.  
 (c) How is the railway line important to the above scheme?  
 \_\_\_\_\_  
 \_\_\_\_\_  
 (d) Give any one benefit of Gezira to the people of Sudan.  
 \_\_\_\_\_  
 \_\_\_\_\_
47. (a) Mention any two examples of crafts.    
 (i) \_\_\_\_\_ (ii) \_\_\_\_\_  
 (c) State any two ways people benefit from craft making.  
 (i) \_\_\_\_\_  
 (ii) \_\_\_\_\_
48. (a) Why does the crested crane on the Uganda coat of arms appear standing on one leg?  
 \_\_\_\_\_  
 (b) Mention any two things where the National Emblem is found.  
 (i) \_\_\_\_\_ (ii) \_\_\_\_\_  
 (c) Give any one reason why the crested crane was chosen to be the National Emblem of Uganda.  
 \_\_\_\_\_



49. (a) Give any one reason why the early traders passed through **Tanganyika** instead of **Kenya** which was a shorter route to Uganda.

(b) Give any **two** positive effects of long distance trade.

(i) \_\_\_\_\_

(ii) \_\_\_\_\_

(c) Why did the early **Arab** traders move in **Caravans**?

50. (a) Mention any **two** groups of missionaries who came to Africa.

(i) \_\_\_\_\_

(ii) \_\_\_\_\_

(b) How did the missionaries contribute to the following sectors in Uganda?

(i) **Health**

(ii) **Education**

**For questions 51 to 54, answer Either Christianity Or Islamic but not both in a number.**

51. **Either:** (a) Mention any **two** creatures God made to provide light.

(i) \_\_\_\_\_

(ii) \_\_\_\_\_

(b) Give any **two** ways of caring for God's creations.

(i) \_\_\_\_\_

(ii) \_\_\_\_\_

**Or:** (a) Mention any **two** creatures Allah made to provide light.

(i) \_\_\_\_\_

(ii) \_\_\_\_\_

(b) Give any **two** ways of caring for Allah's creations.

(i) \_\_\_\_\_

(ii) \_\_\_\_\_

52. **Either:** (a) What is **Holy matrimony**?

(b) Give any **two** reasons why people decide to have Holy matrimony.

(i) \_\_\_\_\_

(ii) \_\_\_\_\_

(c) Mention any **one** example of sexual deviation in our society.

**Or:** (a) What is **Nikkah**?

(b) Give any **two** reasons why Muslims perform Nikkah.

(i) \_\_\_\_\_

(ii) \_\_\_\_\_

(c) Mention any **one** bad act which is not allowed to be done by married Muslims.

53. **Either:** (a) Mention any one apostle who prepared the last supper.

(b) Why did Judas Iscariot betray Jesus?

(c) Who helped Jesus to carry the cross to Calvary?

(d) State one reason why the Pharisees hated Jesus.

**Or:** (a) Mention any two obligatory prayers in Islam.

(i) \_\_\_\_\_ (ii) \_\_\_\_\_

(b) Give any two ways Muslims prepare for prayers.

(i) \_\_\_\_\_

(ii) \_\_\_\_\_

54. **Either:** (a) What is authority?

(b) State any two ways leaders can use their authority to benefit the people.

(i) \_\_\_\_\_

(ii) \_\_\_\_\_

(c) How do leaders misuse their authority today?

**Or:** (a) What is the difference between Hajj and Umra?

(b) Give any one condition a Muslim must fulfill before performing Hajj.

(c) State any two benefits of Hajj to a Muslim.

(i) \_\_\_\_\_

(ii) \_\_\_\_\_

**FOR BOTH**

55. (a) Write down any two gifts God/Allah gave to us.

(i) \_\_\_\_\_

(ii) \_\_\_\_\_

(b) State any two ways we can use God's/Allah's gifts to glorify Him.

(i) \_\_\_\_\_

(ii) \_\_\_\_\_



### Hidden Tip For Excellence in Social Studies and R.E.

Answer the question asked not what you wish was asked.

Pay attention to the question rather than writing everything you know about the question.